

Name _____

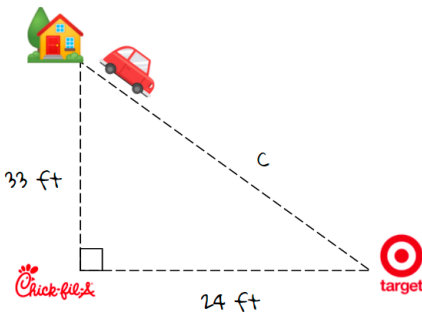
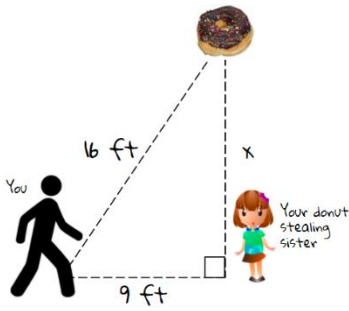
Concept Review (20) 2/19/21

8.G.6 Prove whether the sides lengths form an **acute, right, or obtuse** triangle.

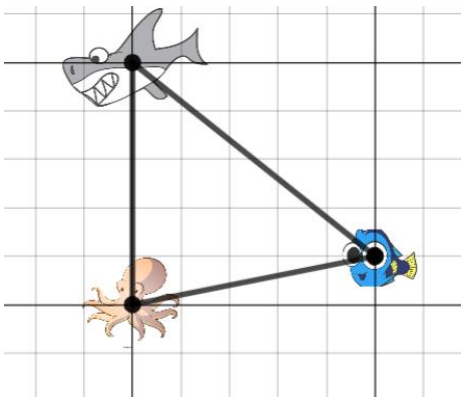
Rating

18, 60, 54

8.G.7 Find the missing **side length**.



8.G.8 Find the **distance** between each character. (**1 unit = 10 ft.**)



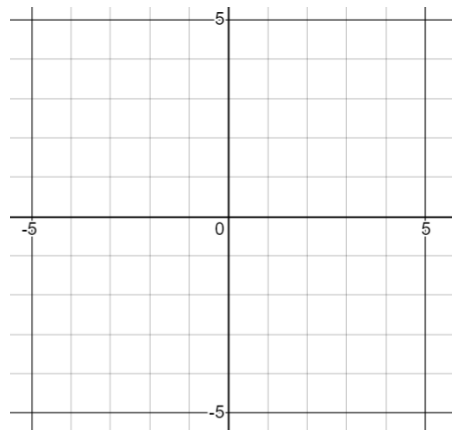
8.EE.8 Solve each **system** for x and y.

$$2x + 6y = 3$$

$$-x - 6y = 3$$

$$y = x + 5$$

$$y = -\frac{2}{3}x$$



$$y = x - 20$$

$$-2x + y = -9$$

Rating