

Name _____

Concept Review (12) 12/4/20



8.SP.1



Patriots:

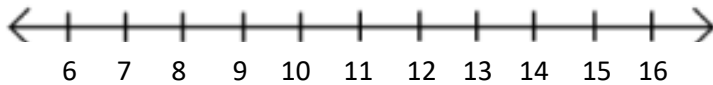


Steelers:

Year	Patriots	Steelers
2009	10	9
2010	14	12
2011	13	12
2012	12	8
2013	12	8
2014	12	11
2015	12	10
2016	14	11
2017	13	13
2018	11	9
2019	12	8

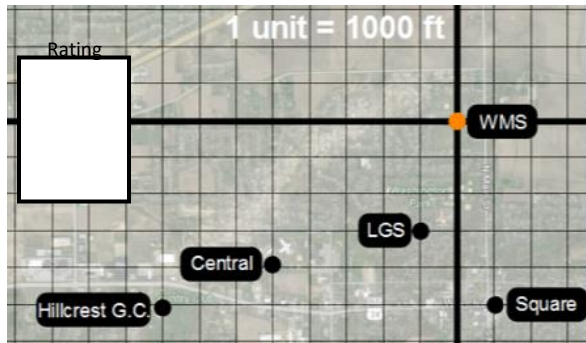
Rating

8.SP.1



Which team is the best? Use parts of the graph to support your claim.

8.G.7



Find the distance from...

WMS to LGS

Hillcrest to WMS

LGS to Square

8.NS.1

Identify each as rational or irrational.

$e + 1$ R / I

$\sqrt{568}$ R / I

$-5\frac{4}{7}$ R / I

$-6.121212\dots$ R / I

Rating

8.NS.1-2

8.NS.2

Give a rational approximation for $\sqrt{734}$

8.EE.6

Graph each equation.

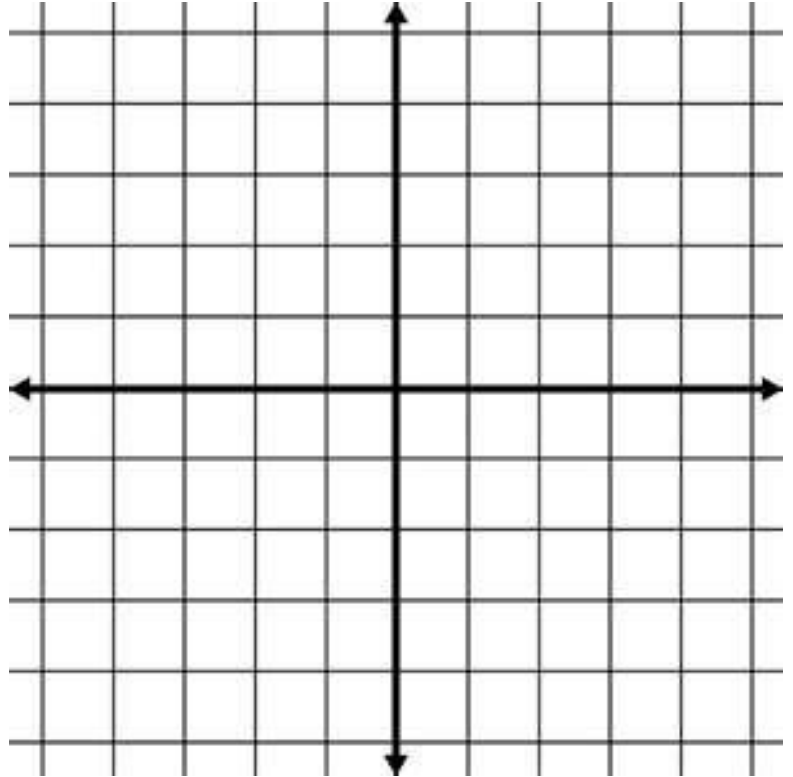
$$y = -2$$

$$y = 3x + 1$$

$$y = -\frac{1}{4}x - 3$$

Rating

8.EE.6



Tell me a **story**.

$y = 2x + 10$ _____
